



International Informatics Olympiad







Presented by:
SILVERZONE FOUNDATION
NEW DELHI - INDIA

Organized by:
Silverzone Foundation
New Delhi, India
For supremacy in Mathematics
www.silverzone.org

CLASS 1st SAMPLE QUESTIONS





The Actual Question Paper Contains 25 Questions. The Duration of the Test Paper is 40 Minutes.

1. Which one of the following figures is NOT an *Output Device*?





- (A)  Printer
(B)  Monitor
(C)  Speaker
(D)  Scanner

2. A computer needs _____ to work.
(A) Air (B) Food (C) Electricity (D) Fan





3. Which one is a *light weight and compact Computer*.

- (A)  Laptop
(B)  Monitor
(C)  Computer
(D)  CPU





4. Which one of the following devices helps you to listen to music using Computer?

- (A)  Speaker
(B)  Microphone
(C)  Monitor
(D)  Joystick





5. Which one of the following is commonly used in CPU to connect different parts?

- (A)  CD-ROM
(B)  Printer
(C)  Data Cable
(D)  Scanner

6. Computer has *three essential parts*. Which one of the following is NOT an essential part?

- (A)  Keyboard
(B)  Monitor
(C)  Joystick
(D)  CPU




7. Steve has to type his name in the computer. Which one of the following parts of computer will help him to type his name?

- (A)  Mouse
(B)  Monitor
(C)  Keyboard
(D)  CPU

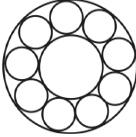
8.  is to  as  is to:

- (A)  (B)  (C)  (D) 

9. Which one would be next figure in the sequence?

-  → ?
(A)  (B)  (C)  (D) 

10. How many circles are there in the given figure?

- 
(A) 9 (B) 10 (C) 11 (D) 12

ANSWERS

1. D 2. C 3. A 4. A 5. C 6. C 7. C 8. B 9. C 10. C