


International Olympiad of Mathematics



CLASS : 1 SAMPLE QUESTIONS

The Actual Question Paper Contains 25 Questions. The Duration of the Test Paper is 40 Minutes.

1. Which one of the following numbers comes in between?

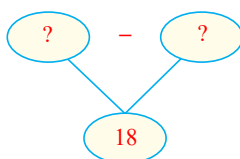


- A. 48 B. 47
C. 52 D. 50

2. Which among the following toys has the least cost in Indian rupees (₹)?

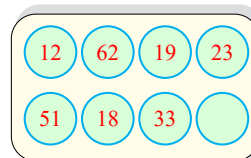


3. Which one of the following options will complete the difference given below?



- (A) 2 tens – 4 ones
(B) 2 tens – 2 ones
(C) 3 tens – 2 ones
(D) 2 tens – 8 ones

4. Which one of the following numbers is *not* written on the board given below?



- (A) Sixty two
(B) Thirty two
(C) Nineteen
(D) Fifty one


5. Which one of the following shapes has exactly 5 sides?




6. If $\bigcirc = 3$ tens, then which one of the following is true for $\bigcirc + \bigcirc + \bigcirc$?

- (A) 90 (B) 60
(C) 80 (D) 70

7. Which of the following objects is thinner than  ?



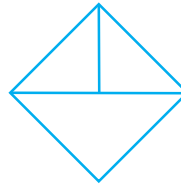
8. What will come in place of the question mark (?) in the number series given below?



- (A) 82
(C) 81

- (B) 83
(D) 84

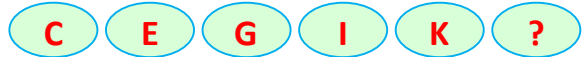
9. How many triangles can be formed using the figure given below?



- (A) 3
(C) 5

- (B) 4
(D) 2

10. What comes next in the letter series given below?



- (A) N
(C) M

- (B) L
(D) J

ANSWERS

1. (D) 2. (C) 3. (B) 4. (B) 5. (B) 6. (A) 7. (C) 8. (B) 9. (B) 10. (C)