









Class 1st Sample Questions

The actual question paper contains 25 questions. The duration of the test paper is 40 minutes.





1. Which one of the following living things cannot move from one place to another place on its own?

- (A)  Plant (B)  Sheep
 (C)  Cat (D)  Dog

2. Which one of the is not a part of a plant?

- (A)  (B) 
 (C)  (D) 

3. Which one of the following is an insect?

- (A)  Ant (B)  Donkey
 (C)  Rose (D)  Frog

4. What is the function of eye in our body?

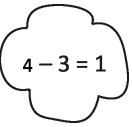

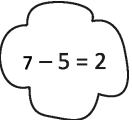
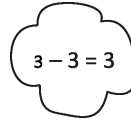
- (A) It helps in hearing (B) It helps in listening
 (C) It helps in seeing (D) It helps in detecting taste

5. Look at the following figure and choose the correct option.




- (A) It is the home of an insect
 (B) It is the home of a fish
 (C) It is the home of a bird
 (D) It is the home of a cat

6. Which one of the following options is not correct?

- (A)  (B) 
 (C)  (D) 

7. There are 10 balls in each of the boxes given below. What will be the answer if the balls of these boxes are counted together?











- Box-1 Box-2
 (A) One tens (B) Two tens
 (C) Three tens (D) Four tens

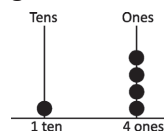
8. $24 \text{ hours} + 24 \text{ hours} = \boxed{?}$

- (A) 4 days (B) 2 days
 (C) 3 days (D) 5 days

9. Choose the incorrect option from the following.

- (A)  >  (B)  < 
 (C)  >  (D)  = 

10. Which one of the following options represents the figure given below?



- (A) 12 (B) 16
 (C) 8 (D) 14



Class_1 Talent Hunt Answers

1. (A) 2. (B) 3. (A) 4. (C) 5. (C) 6. (D) 7. (B) 8. (B) 9. (C) 10. (D)