









Class 2nd Sample Questions

The actual question paper contains 25 questions. The duration of the test paper is 40 minutes.




1. Which of the following animals lives in water?

- (A)  Cat (B)  Rabbit
 (C)  Deer (D)  Fish

2. Identify the cauliflower from the following choices.

- (A)  (B) 
 (C)  (D) 

3. Which one of the following is a fruit?

- (A)  Beans (B)  Maize
 (C)  Orange (D) None of these

4. Which one of the following clothes is essential for winter?

- (A)  Jacket (B)  T-shirt
 (C)  Shirt (D)  Frock

5. Which one of the following parts of a plant enables it to stand upright?





- (A) Stem (B) Leaves
 (C) Fruits (D) All of these

6. How many groups will be formed of the following pencils, if we keep four(4) pencils in each group?

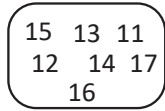


- (A) 3 (B) 5 (C) 2 (D) 6

7. Which one of the following is a plant product?

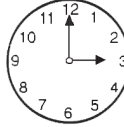

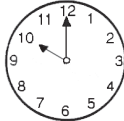

- (A)  Banana (B)  Car
 (C)  Television (D)  Milk

8. Which of the following numbers will come after 15 when numbers inside the box given below are counted in forth counting order?

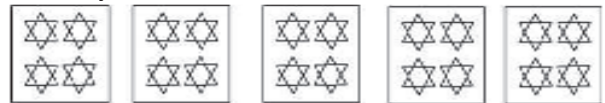


- (A) 16 & 17 (B) 12 & 13
 (C) 13 & 14 (D) Only 11

9. Which one of the following clocks shows the time 5 O' clock?

- (A)  (B) 
 (C)  (D) 

10. Which one of the following options represents the figure correctly?



- (A) $10 \times 2 = 20$ (B) $4 \times 5 = 20$
 (C) $5 \times 5 = 25$ (D) $5 \times 3 = 15$

Class_2 Talent Hunt Answers

1. (D) 2. (C) 3. (C) 4. (A) 5. (A) 6. (A) 7. (A) 8. (A) 9. (D) 10. (B)