


Class 3rd Sample Questions

The actual question paper contains 30 questions. The duration of the test paper is 40 minutes.

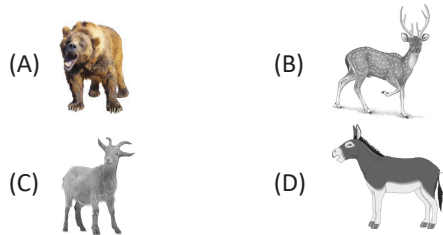
1. Which one of the following requires sunlight to prepare its food?



2. Water is the habitat for which one of the following plant?

- (A) Lotus plant (B) Cactus plant
(C) Babool plant (D) Sugar plant

3. Identify the deer from the following choices.



4. Which one of the following is not a planet?



5. If 552 chairs are arranged in 12 equal rows then find the total number of chairs in each row?

- (A) 46 (B) 55
(C) 56 (D) 44

6. What time does the following watch shows?

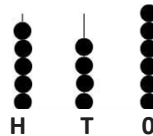


- (A) 4 : 40 (B) 3 : 20
(C) 3 : 40 (D) 5 : 20

7. In a class test, Rakhi secured 10 more marks than Nidhi. Nidhi secured 5 more marks than the passing marks. If passing marks is 25 then how much marks did Rakhi secure?

- (A) 40 (B) 35
(C) 45 (D) 25

8. Guess the number in words by counting the beads?



- (A) Five hundred
(B) Five hundred and forty six
(C) Six hundred and sixty four
(D) Five hundred and forty

9. 'Hot' and 'Cold' has a certain relationship. Find which of the following pairs have the same relationship.

- (A) Big and Tall (B) Long and Tall
(C) Huge and Large (D) Thin and Fat

10. Find the odd one out.

- (A) A (B) L
(C) I (D) E

Class_3 Talent Hunt Answers

1. (C) 2. (A) 3. (B) 4. (B) 5. (A) 6. (C) 7. (A) 8. (B) 9. (D) 10. (B)